

# CUTUBKA 10<sup>aad</sup>

## LACAGTEENA ITOOBIYA



### 10.1 Lacagta qadaadiicda (saantiimyadaa) iyo birrka lacagta noodhyada (wara qodaha) ah ee Itoobiya

#### Hawlgalka- 1























Hawlgalka -1 Sida tusaalaaha lagu tusaay ha isku aadiyaan.































## 10.2 Xidhiidhka ka dhexeeya Saantiimada iyo Birrka

### Laylis - 1

 +  = 15 S  +  = _____ S  +  = _____ S  +  = _____ S	 +  +  = _____ S  +  +  +  = _____ S  +  +  +  +  = _____ S
---	--

### Laylis - 2

     		    	    	   	  	   
---	--	---	---	---	---	--

**Laylis - 1** meelaha bannaan ka buuxiya wadarta senaatiimta  
**Laylis - 2** isku aadiya kuwa qiima hoodu isle eg yahay  
 (isku aadiya kuwa isku sarritma)





### Hawlgalka- 2



Hawlgalka-2 Sheega magacyada noodhyada birrka.



## Laylis – 3

Hibo



Khadar



Axmad




Ismaaciil



## Laylis-3

Ismaaciil imisa saantiim ayuu haystaa  
 50 saantiimoo qudhaata ayaa haysta?  
 Nooca 5 saantiim oo badan ayaa haysta  
 25 saantiim badan ayaa haysta? ?  
 Ayaan haysan nooca qadaadiic 10 saantiim ah?  
 Ayaa leh 1 birr oo qadaadiic ah?






### Laylis – 4




5 birr



2 birr



1 birr



2 birr



4 birr



50 saa

### Laylis-4

Hal buug iyo hal qalin qori imisa birr ayaa lagu iibsadaa?  
3 buug iyo 2 qalinbiig qiimahoodu waa imisa?