



ምዕራፍ ሐደ

መቼፀሪ ቁፅርታት ክሳብ 9




1.1. መቼፀሪ ቁፅርታት ካብ 1 ክሳብ 5ን ቕደም ሰዓቦምን

ንጥፊት 1 (ብጉጅለ) ሕድሕድ እንስሳ በቢዓይነቶም ፍለዩ::



መልመዳ 1 ሀ) ኣባጊዕ ዶ ኣኽልብቲ ይበዝሑ?

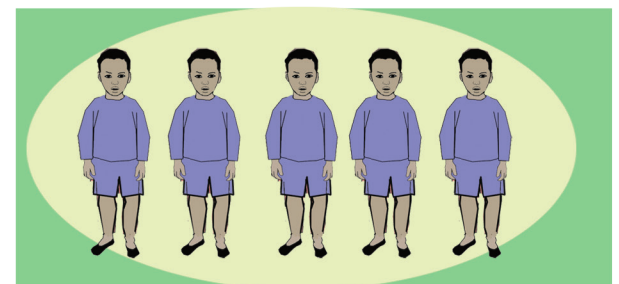
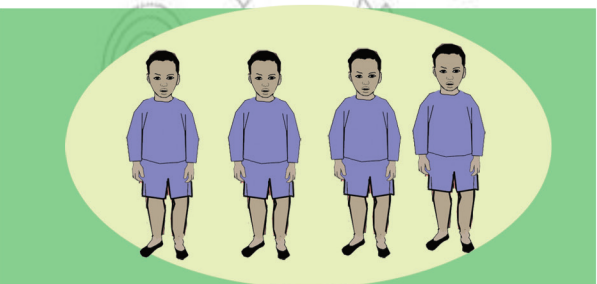





ለ) ደርሁ ዶ ደማሙ ይውሕዳ?






ንጥራት 2 ይበዝሕ፣ ይወሕድ፣ ወይ ማዕረ ብምባል አወዳድሩ።





ንጥራት 3 ዓው ኢልኩም ካብ 1 ክሳብ 5 ዘለዉ ቁፅርታት ፀውዑ።

1



2



3



4




5



ንጥራት 4 ካብ 1 ክሳብ 5 ኣዳብሮትኹም ቁፀሩ።

1 2 3 4 5





ንጥራት 5 (ኣብ ክፍለ ዝስራሕ ዕዮ) ንዝተውሃቡ ቁፅርታት ብዛዕሳልን ብባለቋን ግለፁ።

	1	2	3	4	5

መልመዳ 2 ስእሲ ምስ ቁፅሪ ኣዛምዱ።



መልመዳ 3 አዛምዱ::

መልመዳ 4 ቁፅሪ ምስ በዝሒ እግሪ አዛምዱ::



መልመዳ. 5 ነዞም ሕንፃፃፃት ደጋጊምኩም ዕሓፉ።

/	/	/	/	/	/	/	/	/	/
((((((((((
))))))))))

መልመዳ. 6 አድሚኞቹኩም ዕሓፉ።

1	1	1	1				
2	2	2	2				
3	3	3	3				
4	4	4	4				
5	5	5	5				

መልመዳ. 7 በዝሒ ፍሬታት በ-ን ደጋጊምኩም ዕሓፉ።

	1	1	1	_____	_____	_____	_____
	2			_____	_____	_____	_____
	3			_____	_____	_____	_____
	4			_____	_____	_____	_____
	5			_____	_____	_____	_____



መልመዳ 8 በዝሐ ስእሊ ፅሓፉ::

<p>3</p>	<p>?</p>
<p>?</p>	<p>?</p>

ንጥራት 6 ሀ. ደረጃ ብምድያብ ቁፀሩ::

1 2 3 4 5

ለ. ካብ ደረጃ ብምውራድ ቁፀሩ::

5 4 3 2 1

መልመዳ 9 ብቕደም ሰዓብ ፅሓፉ::

<p>1 ○ 4 ○</p>	<p>5 4 ○ 2 1</p>
<p>1 2 ○ ○ ○</p>	<p>5 ○ ○ 2 ○</p>



መልመዳ. 10 ስእሊ ምስ ቁፅሪ ኣዛምዱ።

ንጥራት 7 ሕብሪ ብምልካይ ስእሊ ምስ ቁፅሪ ኣዛምዱ ::

መልመዳ. 11 በዝሒ ስእሊ ኣብ ሳንዱቕ ዕሓፉ።



ንጥራት 8 በዝሐም አወዳድሩ ::

5 > 2

2 = 2

2 < 3

>

=

<

ንጥራት 9 እናቆጠርኩም አወዳድሩ::

2 < 5

>

<

=

? ? 4

5 ? ?



መልመዳ 12



ብምጥቃም ኣወዳድሩ ::

	<input type="text"/>	$>$	<input type="text"/>	
	<input type="text"/>	$?$	<input type="text"/>	

	<input type="text"/>	<input type="text"/>	<input type="text"/>	
	<input type="text"/>	<input type="text"/>	<input type="text"/>	

መልመዳ 13



ብምጥቃም ኣወዳድሩ ::

4 $>$ 3	2 $?$ 1	2 $?$ 2
4 $?$ 4	5 $?$ 5	5 $?$ 1
2 $?$ 5	1 $?$ 4	3 $?$ 5

መልመዳ 14 ዝነደለ ቁፅሪ ፅሓፉ ::

5	4	3	?	1
?	4	3	2	?

5	4	?	?	?
5	?	?	?	1



1.2. መቼፀሪ ቁፅርታት ካብ 6 ክሳብ 9 ን ቕደም ሰዓቦምን

ንጥራት 10 ዓው ኢልኩም ቁፀሩ።

	6		
	7		
	8		
	9		

መልመዲ 15 ኣዛምዱ።

መልመዲ 16 በዝሓም ኣኸብቡ።



መልመዳ 17 አድማቸውን ፅሁፍ፡፡

6	6	6	6				
7	7	7	7				
8	8	8	8				
9	9	9	9				

መልመዳ 18 ብስሌሊ ግለፁ፡፡

6 ● ● ● ● ● ●

7 _____

8 _____

9 _____

ንጥረት 11 ዝሰደለ ቁፅራ ፅሁፍ፡፡

1	2	3	?	?	?	7	?	?
1	?	3	?	5	?	?	?	9
1	?	?	?	?	6	7	?	?
?	2	?	4	?	?	?	?	9



መልመዳ 19 ስዓባይ ቁፅሪ ዕሓፉ።

5 → <input type="text"/>	4 → <input type="text"/>	3 → <input type="text"/>
3 → <input type="text"/>	6 → <input type="text"/>	7 → <input type="text"/>
6 → <input type="text"/>	1 → <input type="text"/>	2 → <input type="text"/>



ንጥፈት 12 አንብቡ።



መልመዳ 20 ቀዳማዊ ቁፅሪ ዕሓፉ።

<input type="text"/> 8 → <input type="text"/> 9	<input type="text"/> ? → <input type="text"/> 6	<input type="text"/> ? → <input type="text"/> 2
<input type="text"/> ? → <input type="text"/> 6	<input type="text"/> ? → <input type="text"/> 8	<input type="text"/> ? → <input type="text"/> 7

መልመዳ 21 በዝሐም ዕሓፉ።

 → <input type="text"/>	 → <input type="text"/>
--	---



ንጥራት 13 ምልክት > ; < ; = ብምጥቃም ኣወዳድሩ::

Activity 13: Use symbols >, <, = to compare groups of objects.

Row 1: 5 trees vs 2 trees. Comparison: 5 > ?

Row 2: 5 trees vs 8 trees. Comparison: ? ? ?

Row 3: 9 trees vs 9 trees. Comparison: ? ? ?

Row 4: 8 women vs 6 women. Comparison: ? ? ?

መልመዳ 22 ኣወዳድሩ::

Activity 22: Fill in the missing symbols.

9 > 6	3 ? 8	7 ? 4	6 ? 1
5 ? 8	8 ? 9	8 ? 3	9 ? 8



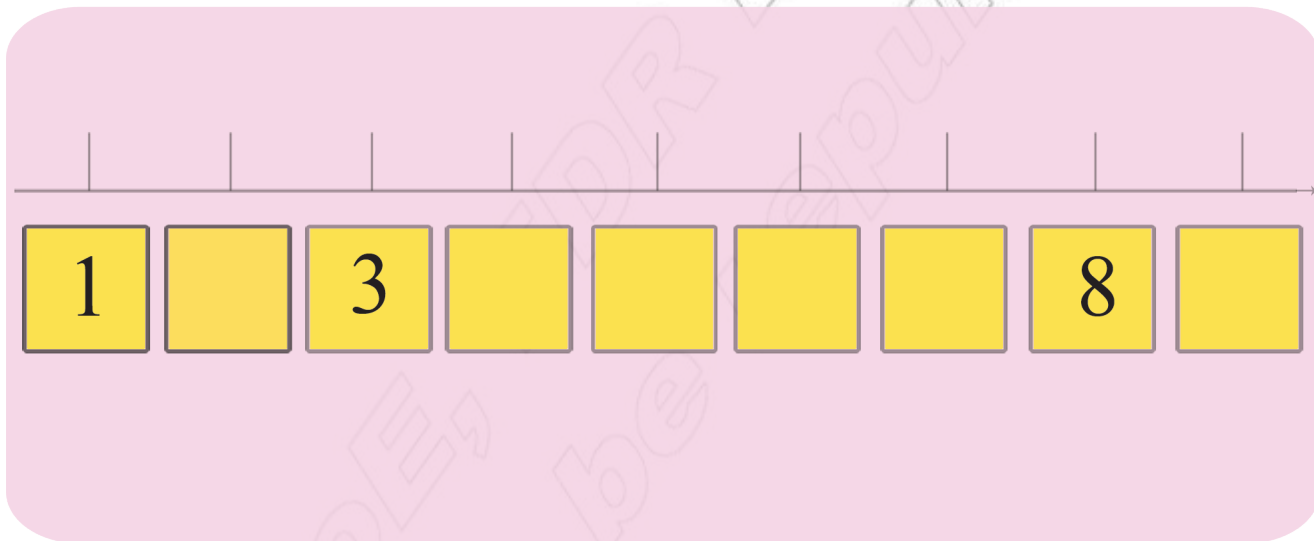
ንጥራት 14 ሀ. በዝሐ ኣፃብዕትን ነጠብጣብን ኣዛምዱ::

ለ. በዝሐ ሕድሕድ ዓይነት ስእሊ ዕኣፉ



ንጥራት 15

ዝጎደሉ ቁፅርታት ምልኡ።



ንጥራት - 16

ንኹሎም ነጥብታት ብቕደም ሰዓብ ኣራኽቡ።

