

ምዕራፍ ክልተ

ምድማርን ምጉዳልን ክሳብ 9

$$+ \quad - \quad =$$


$$2 + 5 = 7$$

$$7 - 2 = 5$$

2.1. ምድማር ክሳብ 9

ካብ 1 ክሳብ 5 ዘለዉ መቐፀሪ ቁፅርታት ምድማር

ንጥፊት 1 በዝሓም ፅሓፉ::



2



?



?



?

ንጥፊት 2 ብምቐፃር ደምሩ::



2

+



1

=



3

$2 + 1 = 3$



3

+



2

=



?

$3 + 2 = 5$



2

+



1

=



?

$2 + 1 = ?$



?

+



?

=

?

$? + ? = 5$

0

1

2

3

4

5

6

7

8










9

+





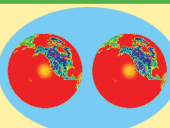
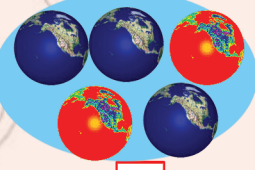




-

=

መልመዳ 1 ደምሩ።

		=		$1 + 2 =$ <input data-bbox="1337 399 1401 457" type="text" value="?"/>
		=	<input data-bbox="730 503 948 567" type="text" value="?"/>	$3 + 1 =$ <input data-bbox="1337 503 1401 561" type="text" value="?"/>
		=	<input data-bbox="730 607 948 671" type="text" value="?"/>	$1 + 4 =$ <input data-bbox="1337 607 1401 665" type="text" value="?"/>
		=	<input data-bbox="730 700 948 764" type="text" value="?"/>	$2 + 3 =$ <input data-bbox="1337 700 1401 758" type="text" value="?"/>

መልመዳ 2 ደምሩ።

	+		=		$2 + 1 = 3$
<input data-bbox="293 1094 341 1156" type="text" value="2"/>	+	<input data-bbox="596 1094 644 1156" type="text" value="1"/>	=	<input data-bbox="932 1094 979 1156" type="text" value="3"/>	
	+		=		$3 + 2 =$ <input data-bbox="1315 1239 1362 1301" type="text" value="?"/>
<input data-bbox="293 1355 341 1417" type="text" value="3"/>	+	<input data-bbox="644 1355 692 1417" type="text" value="2"/>	=	<input data-bbox="932 1355 979 1417" type="text" value="?"/>	
	+	<input data-bbox="596 1477 740 1541" type="text" value="?"/>	=		$2 +$ <input data-bbox="1235 1477 1283 1539" type="text" value="?"/> $= 4$
<input data-bbox="293 1583 341 1645" type="text" value="?"/>	+	<input data-bbox="644 1583 692 1645" type="text" value="?"/>	=	<input data-bbox="932 1583 979 1645" type="text" value="?"/>	
	+		=	<input data-bbox="810 1705 1098 1790" type="text" value="?"/>	$3 + 1 =$ <input data-bbox="1315 1736 1362 1798" type="text" value="?"/>
<input data-bbox="325 1831 373 1893" type="text" value="?"/>	+	<input data-bbox="644 1831 692 1893" type="text" value="?"/>	=	<input data-bbox="932 1831 979 1893" type="text" value="?"/>	

ንጥረት 3 ብምቕጥር ደምሩ።

$2 + 1 = 3$
 $1 + 2 = 3$

+ =
 + =

$1 + 4 = ?$
 $4 + 1 = ?$
 $2 + 3 = ?$
 $3 + 2 = ?$

መልመዳ 3 ደምሩ።

$1 + 3 = ?$ $3 + 1 = ?$
 $2 + 1 = ?$ $1 + 2 = ?$
 $1 + 4 = ?$ $4 + 1 = ?$

0

1

2

3

4

5

6

7

8

9

+

-

=

ንጥረት 4 አፃብዕትኹም እናቆጠርኩም ባዶ ቦታ ምልክቶ::

መልመዳ 4 አፃብዕትኹም ብምጥቃም ደምሩ::

- 5 + 1 =
- 5 + 3 =
- 5 + 4 =
- 4 + 5 =
- 3 + 5 =

ንጥራት 5 ብምቅጻር ብትኹል ደምሩ።

$$\begin{array}{r} 4 \\ +2 \\ \hline \boxed{6} \end{array}$$

$$\begin{array}{r} 3 \qquad 6 \\ +6 \qquad +3 \\ \hline \boxed{9} \qquad \boxed{} \end{array}$$

$$\begin{array}{r} 2 \qquad 5 \\ +5 \qquad +2 \\ \hline \boxed{} \qquad \boxed{} \end{array}$$

መልመዳ 5 ኢንፖት ብምጥቃም ብትኹል ደምሩ።

$\begin{array}{r} 3 \\ + 5 \\ \hline \boxed{} \end{array}$	$\begin{array}{r} \text{ } \\ \text{ } \\ \hline \text{ } \end{array}$	$\begin{array}{r} 5 \\ + 4 \\ \hline \boxed{} \end{array}$	$\begin{array}{r} \text{ } \\ \text{ } \\ \hline \text{————} \end{array}$
$\begin{array}{r} 2 \\ + 3 \\ \hline \boxed{} \end{array}$	$\begin{array}{r} 5 \\ + 1 \\ \hline \boxed{} \end{array}$	$\begin{array}{r} 6 \\ + 3 \\ \hline \boxed{} \end{array}$	$\begin{array}{r} 2 \\ + 5 \\ \hline \boxed{} \end{array}$

መልመዲ 6 ደምፋ።

$4 + 3 = 7$	
$2 + 5 = \boxed{?}$	
$5 + 3 = \boxed{?}$	
$6 + 2 = \boxed{?}$	

ንጥራት 6

ነቲ ሚዛን ብኸመይ ማዕረ ምግባር ይከኣል?

$2 + ? = 8$

መልመዲ 7 ቃል ግድላት

ሀ.

ለ.

ንጥራት 7 ብምቕፃር ደምሩ።

2 + = 6

3 + = 8

5 + = 9

መልመዲ 8 ተደላዩ ቁፅሪ ምልክ።

ድምር 5		
1	+	4
2	+	?
3	+	?
4	+	?

ድምር 7		
1	+	6
2	+	?
?	+	4
4	+	?

ድምር 9		
1	+	8
2	+	?
3	+	?
?	+	4

መልመዲ 9 ዝጎደለ ቁፅሪ ምልክ።

ሀ. $? + 2 = 5$

ለ. $\text{Basket of 5 oranges} + \text{Basket with ?} = \text{Basket of 9 oranges}$

ሐ. $\text{Basket with ?} + \text{Basket with ?} = \text{Basket of 7 oranges}$

0

1

2

3

4

5

6

7

8

9

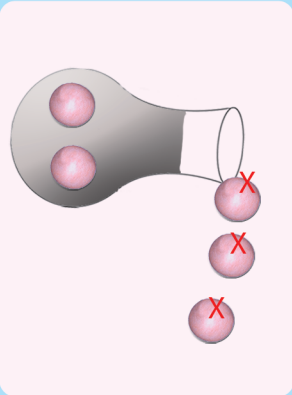
+

-

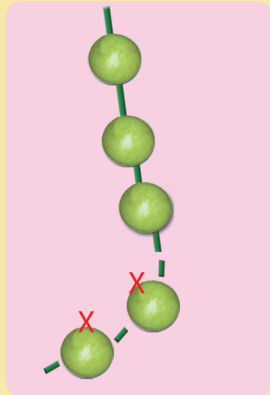
=

2.2. ምጉዳል ክሳብ 9

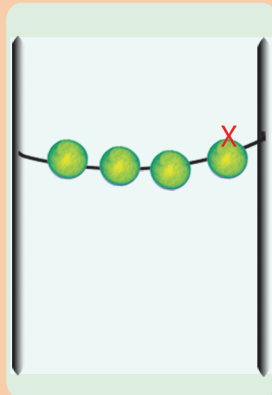
ንጥራት 8 ዋጋ ሳንዱቅ ክንደይ እዩ?



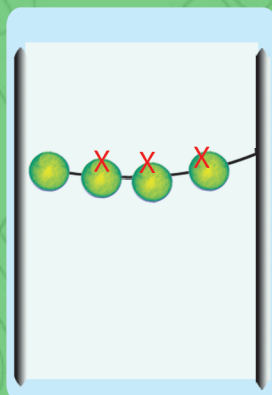
$5 - 3 = \boxed{2}$



$5 - 2 = \boxed{}$




$4 - 1 = \boxed{}$




$4 - 3 = \boxed{}$


መልመዳ 10 ዋጋ ሳንዱቅ ክንደይ እዩ?




$5 - 3 = \boxed{}$



$5 - 4 = \boxed{}$







$4 - 2 = \boxed{}$









$2 - 1 = \boxed{}$

ንጥራት 9 ዋጋ ሳንዱቅ አስፍሩ

 $7 - 2 = \square$	 $\square - \square = \square$
 $\square - \square = \square$	 $\square - \square = \square$

መልመዳ 11 ብትኹል አገድሉ።

 $8 - 5 = \square$	 $7 - 4 = \square$
 $9 - 5 = \square$	 $6 - 3 = \square$
 $7 - 2 = \square$	 $8 - 3 = \square$

መልመዳ 12 ሀ. በዝሐ ዝተረፉ ዕምብላሊዓት ድለዩ።

$3 - 1 = \boxed{?}$	
$4 - 3 = \boxed{?}$	
$5 - 4 = \boxed{?}$	
$5 - 2 = \boxed{?}$	

ለ. በዝሐ ዝተረፉ ዕንፃይቲ ክርቢት ድለዩ።

$6 - 5 = \boxed{?}$	
$7 - 2 = \boxed{?}$	
$9 - 2 = \boxed{?}$	

መልመዳ 13 ክንደይ መካይን ተሪፊን?

	9
	$9 - 1 = \boxed{8}$
	$9 - 2 = \boxed{}$
	$9 - 3 = \boxed{}$
	$9 - 4 = \boxed{}$
	$9 - 5 = \boxed{}$
	$9 - 6 = \boxed{}$
	$9 - 7 = \boxed{}$
	$9 - 8 = \boxed{}$

0 1 2 3 4 5 6 7 8 9 + - =

ንጥራት 10 ሀ) ሕንፃ ቁፅሪ ብምጥቃም ኣገድሎ።

$7 - 3 = \square$

ለ) ሰደቓ ቁፅሪ ብምጥቃም ኣገድሎ።

$9 - 3 = \square$

መልመዳ 14 ብጋድም ኣገድሎ።

$9 - 4 = \square$	$8 - 4 = \square$	$8 - 2 = \square$
$7 - 5 = \square$	$9 - 6 = \square$	$9 - 1 = \square$
$6 - 4 = \square$	$7 - 6 = \square$	$8 - 6 = \square$

መልመዳ 15 ብተኹል ኣገድሎ።

$\begin{array}{r} 9 \\ - 6 \\ \hline \hline \end{array}$	$\begin{array}{r} 5 \\ - 1 \\ \hline \hline \end{array}$	$\begin{array}{r} 7 \\ - 5 \\ \hline \hline \end{array}$	$\begin{array}{r} 9 \\ - 8 \\ \hline \hline \end{array}$	$\begin{array}{r} 6 \\ - 4 \\ \hline \hline \end{array}$
$\begin{array}{r} 8 \\ - 4 \\ \hline \hline \end{array}$	$\begin{array}{r} 9 \\ - 2 \\ \hline \hline \end{array}$	$\begin{array}{r} 7 \\ - 5 \\ \hline \hline \end{array}$	$\begin{array}{r} 6 \\ - 3 \\ \hline \hline \end{array}$	$\begin{array}{r} 8 \\ - 6 \\ \hline \hline \end{array}$

መልመዳ 16 ምጉዳል ብምድማር፣ ምድማር ብምጉዳል ግለፁ።



$8 - 6 = 2$

$8 - 2 = 6$

$2 + 6 = \boxed{?}$



$9 - \boxed{?} = 5$

$9 - \boxed{?} = 4$

$4 + 5 = \boxed{?}$



$7 - 3 = 4$

$7 - \boxed{?} = 3$

$3 + 4 = \boxed{?}$



$9 - 6 = \boxed{?}$

$9 - \boxed{?} = 6$

$3 + 6 = \boxed{?}$

 $2 + 5 = \boxed{?}$
 $7 - 2 = \boxed{?}$
 $7 - 5 = \boxed{?}$
 $3 + 5 = \boxed{?}$
 $8 - 3 = \boxed{?}$
 $8 - 5 = \boxed{?}$
 $4 + 5 = \boxed{?}$
 $9 - 4 = \boxed{?}$
 $9 - 5 = \boxed{?}$

መልመዳ 17 ዋጋ ሳንዲቅ ድለዩ።

8 - 2 = ?

7 - 4 = ?

? - 4 = 3

? - 5 = 4

0

1

2

3

4

5

6

7

8

9

+

-

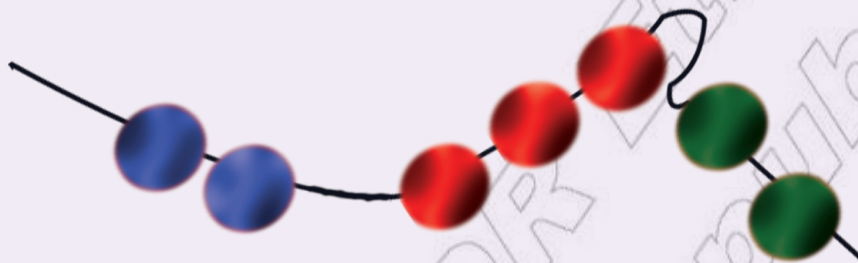
=

2.3. ምድማር ስለስተ ተደመርቲ/ድማሮም ካብ 9 ዘይበልፅ/

ንጥፈት 11 ብምቕጻር ደምሩ።



$$3 + 1 + 2 = \boxed{?}$$



$$\underline{2} + \underline{\quad} + \underline{\quad} = \boxed{?}$$

መልመዪ 18 ደምሩ።

$$1 + 2 + 3 = \boxed{\quad}$$

$$2 + 3 + 4 = \boxed{\quad}$$

$$1 + 3 + 5 = \boxed{\quad}$$

$$1 + 1 + 1 = \boxed{\quad}$$

$$3 + 3 + 3 = \boxed{\quad}$$

$$2 + 4 + 1 = \boxed{\quad}$$

$$1 + 1 + 7 = \boxed{\quad}$$

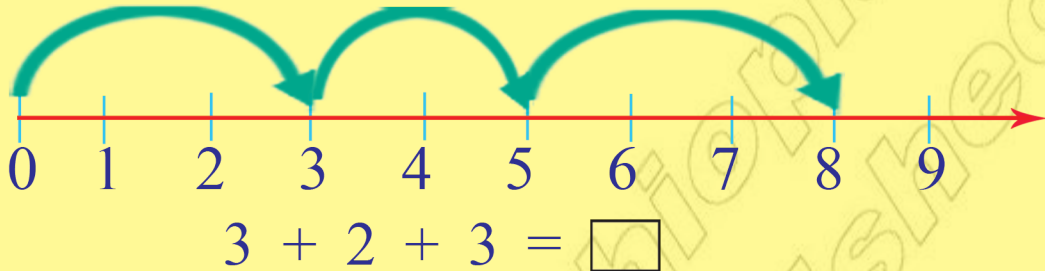
$$2 + 3 + 1 = \boxed{\quad}$$

$$1 + 2 + 6 = \boxed{\quad}$$

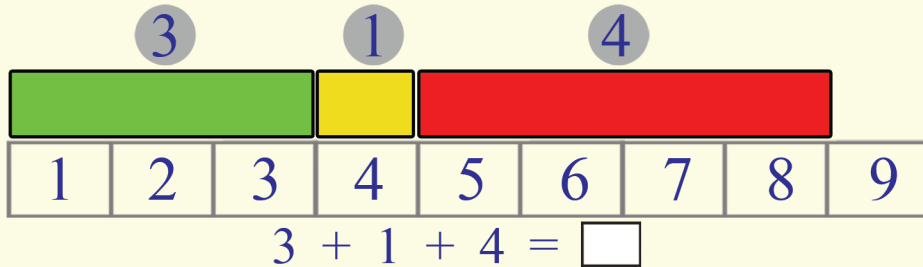
$$5 + 1 + 1 = \boxed{\quad}$$

ንጥራት 12

ሀ. አንፃሪ ቁፅሪ ብምጥቃም ደምሩ።



ለ. ሰደቃ ቁፅሪ ብምጥቃም ደምሩ።

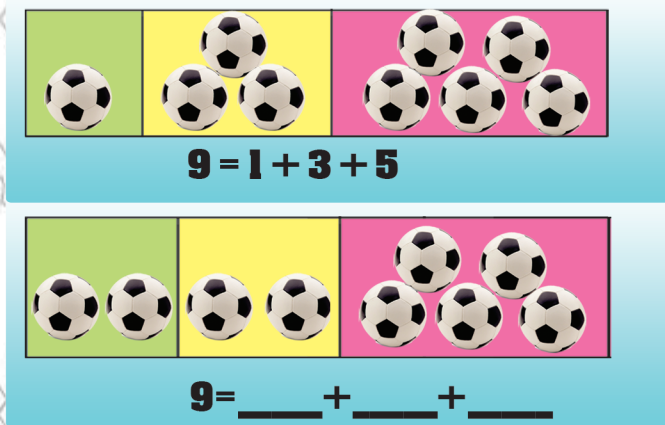


ንጥራት 13

ብስለስተ ተደመርቲ ግለፅ።



9



መልመዳ 19

ብስለስተ ተደመርቲ ቁፅርታት ግለፅ።

□ + □ + □ = 9

□ + □ + □ = 9

□ + □ + □ = 9

0

1

2

3

4

5

6

7

8

9

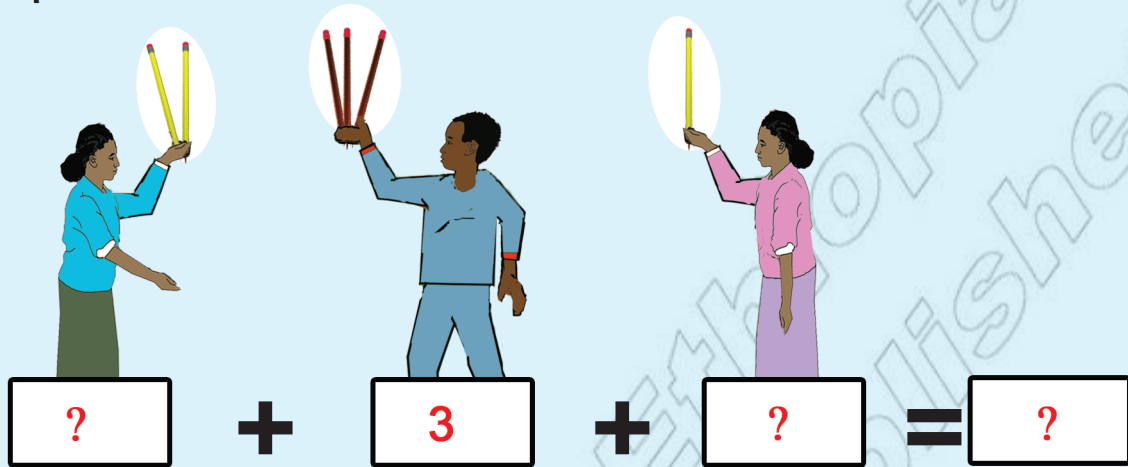
+

-

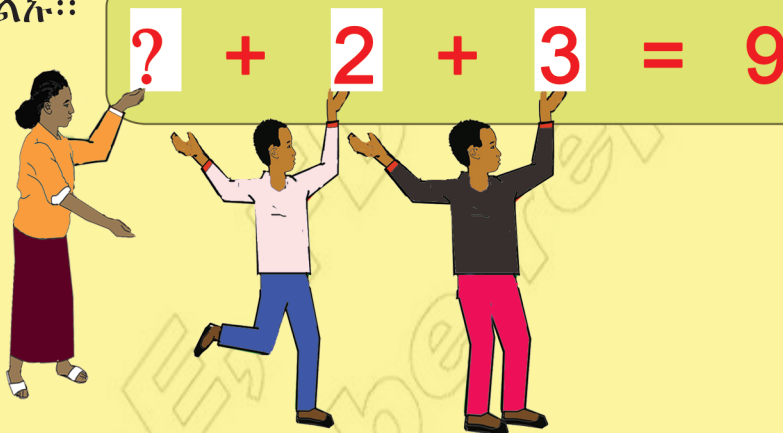
=

መልመዳ 20

1. ደምሩ።



2. ዝንደሉ ምልኩ።



3. ደምሩ።

