


# ምዕራፍ ሸውዓተ

ምርባሕን ምምቃልን ክሳብ 20



## 7.1. ብ 2 ምርባሕ ክሳብ 20

ንጥፊት 1 ምድማር ብምርባሕ ግለፁ።




3

+



3




6

2


X

3



2

+



2

=



4

?

X

?

=

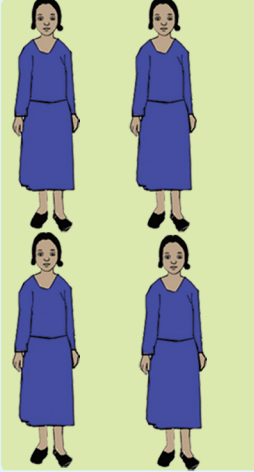
4

'X' ምልክት ምርባሕ እዩ።

- 11
- 12
- 13
- 14
- 15
- 16
- 17
- 18
- 19
- 20

X ÷


**ንጥራት 2** ብምርባሕ ግለፅ፡፡



4

2


+



4

?

=




8

8

+


X



5


2

+



5

=



10

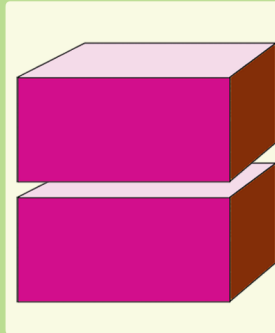
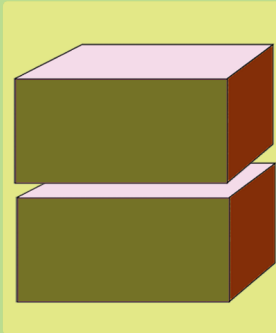

+

X



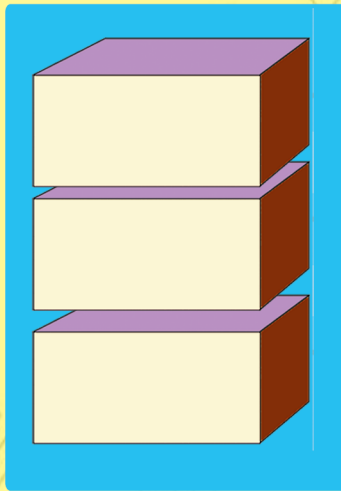
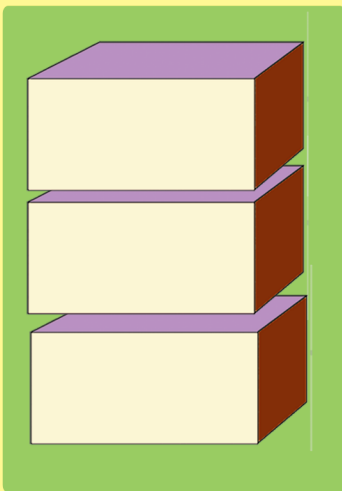
**x** **÷**

**መልመዳ 1** ዝጎደለ ቁፅራ ምልኩ፡፡





$$2 + 2 + 2 = 6$$

$$\boxed{?} \times 2 = 6$$



$$3 + 3 = 6$$

$$\boxed{?} \times \boxed{?} = 6$$



$$\boxed{?} \times \boxed{?} = \boxed{?}$$

11

12

13

14

15

16

17

18

19

20

X ÷

ንጥራት 3

ተቆፃሪ ነገራት ብምጥቃም ዝሰደሉ ቁፅራ ምልክ፡፡



$$2 \text{ ጊዜ } 1 \text{ ኩዕሽ} = \boxed{?}$$

$$1 + 1 = \boxed{?}$$

$$2 \times 1 = \boxed{?}$$



$$2 \text{ ጊዜ } 3 \text{ ኩዕሽ} = \boxed{?}$$

$$3 + 3 = \boxed{?}$$


$$2 \times 3 = \boxed{?}$$



$$2 \text{ ጊዜ } 2 \text{ ኩዕሽ} = \boxed{?}$$

$$2 + 2 = \boxed{?}$$

$$2 \times 2 = \boxed{?}$$



$$2 \text{ ጊዜ } 5 \text{ ኩዕሽ} = \boxed{?}$$


$$\boxed{?} + \boxed{?} = \boxed{?}$$

$$\boxed{?} \times \boxed{?} = \boxed{?}$$

$$2 \times 1 = \boxed{?}$$

$$2 \times 2 = \boxed{?}$$

$$2 \times 5 = \boxed{?}$$



**መልመዳ 2** ብምርባሕ ግለፁ። ዋጋ ርብኢት ፅሓፉ።

$$8 + 8 = \overset{\text{መራብሒ}}{2} \times \overset{\text{መራብሒ}}{8} = \overset{\text{ርባሕ}}{16}$$

$$9 + 9 = \boxed{?} \times \boxed{?} = \boxed{?}$$

$$10 + 10 = \boxed{?} \times \boxed{?} = \boxed{?}$$

$$6 + 6 = \boxed{?} \times \boxed{?} = \boxed{?}$$

**መልመዳ 3** ብምድማርን ብምርባሕን ፅሓፉ።



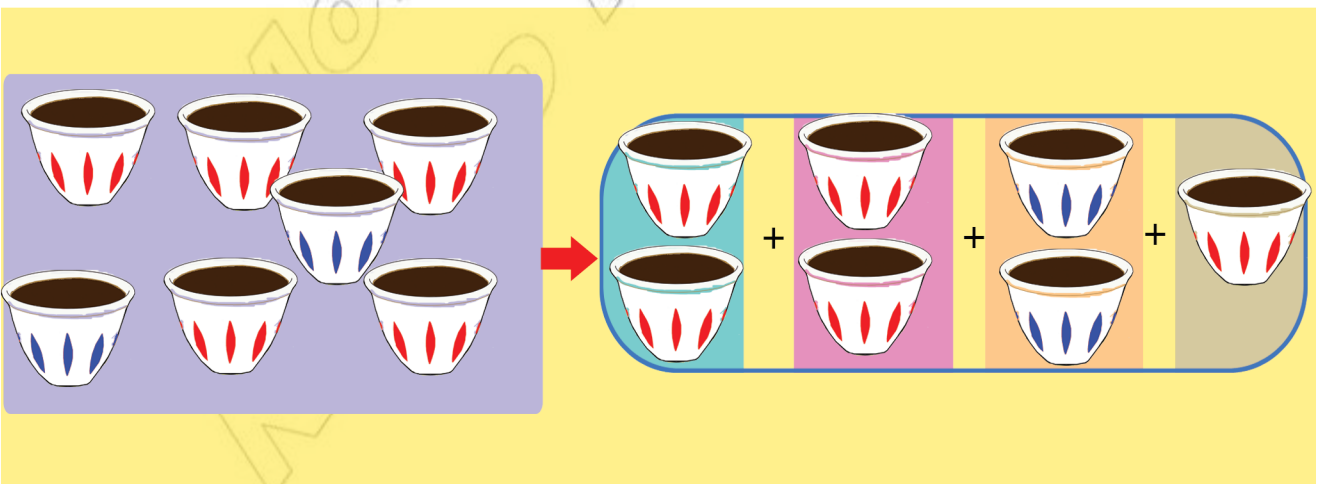
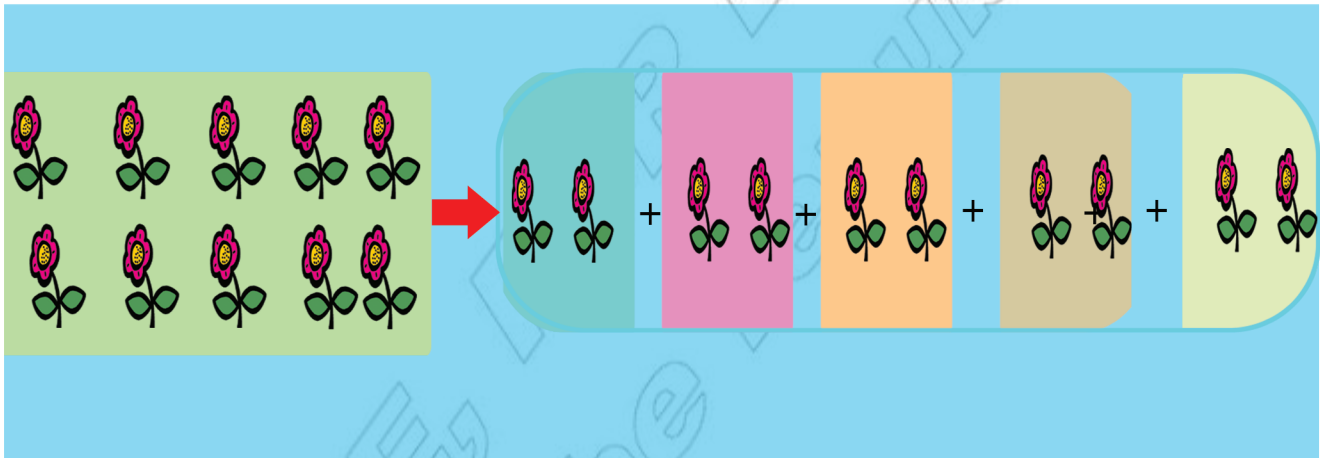
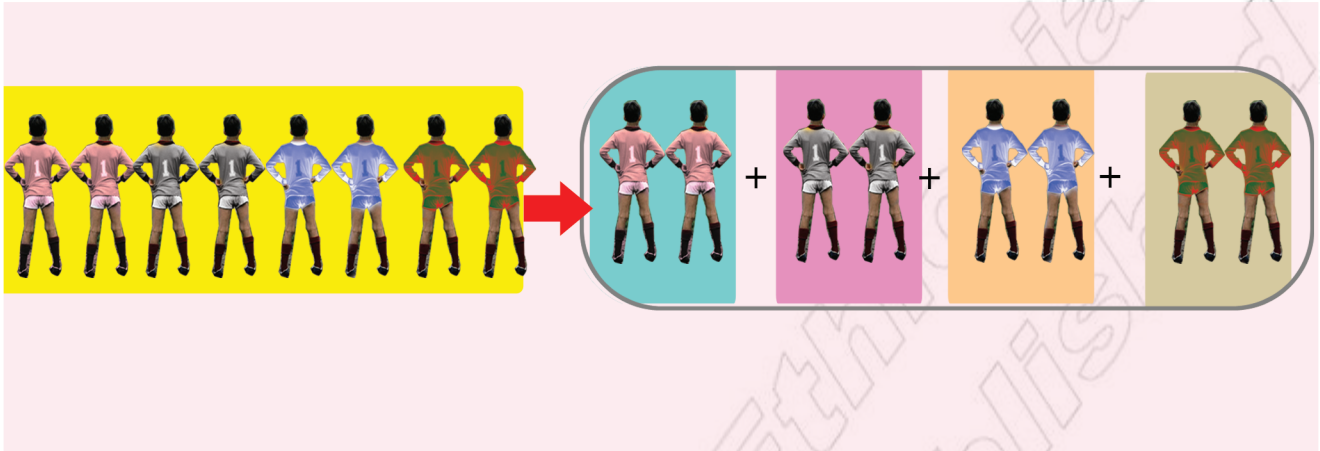
$$\boxed{?} + \boxed{?} = \boxed{?}$$


$$\boxed{?} \times \boxed{?} = \boxed{?}$$

- 11
- 12
- 13
- 14
- 15
- 16
- 17
- 18
- 19
- 20

×
÷

**ንጥፈት 4** በቢ. 2 ዝምደቡን ዘይምደቡን ፍለዩ ::





**ንጥራት 5** በቢ. 2 ክምደቡ ዝክእሉ ፈሊኹም ብርብሒት 2 ፅሓፉ።

ሀ.		✓
ለ.		X
ሐ.		?
መ.		?

**መልመዳ 4** በቢ. 2 ክምደቡ ዝክእሉ ናለዩ።

<table border="1"> <tr> <td>4</td> <td>5</td> </tr> <tr> <td>2</td> <td>18 9</td> </tr> <tr> <td>7</td> <td>11 14</td> </tr> </table>	4	5	2	18 9	7	11 14	<table border="1"> <tr> <td>4</td> <td>?</td> </tr> <tr> <td>18</td> <td>?</td> </tr> </table>	4	?	18	?
4	5										
2	18 9										
7	11 14										
4	?										
18	?										

- 11
- 12
- 13
- 14
- 15
- 16
- 17
- 18
- 19
- 20

X ÷

**ንጥረት 6** ዋጋ ሳንዱቅ ድለዩ።

**ሀ.**

+

=

×

=

**ለ.**

+
+

=

×

=

**ሐ.**

+

=

++

×

=

×





**መልመዳ 5** ተደላዩ ቁፅሪ ኣብ ባዶ ቦታ ምልኡ።

$?$   $\times$   $?$   $=$   $?$

$?$   $\times$   $?$   $=$   $?$

$?$   $\times$   $?$   $=$   $?$

$?$   $\times$   $?$   $=$   $?$

$2 \times 3 = ? \times 2$

$4 \times 2 = ? \times ?$

11

12

13

14

15

16

17

18

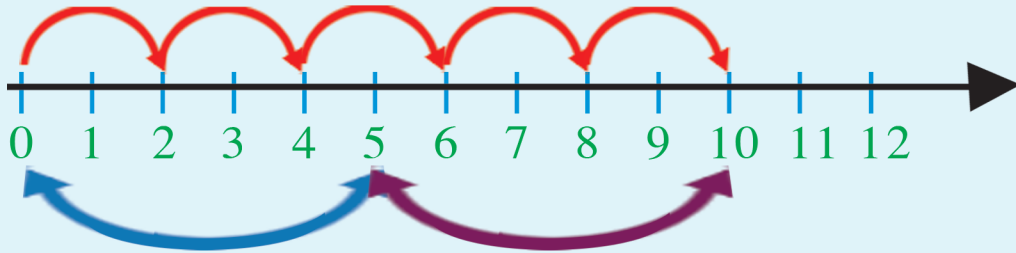
19

20

X ÷

መልመዳ 6 ሀ. ዋጋ ሳንዳች ድለዩ። እንታይ ተግዲብኩም?

$$\boxed{2} \times \boxed{\phantom{00}}$$



$$\boxed{\phantom{00}} \times \boxed{\phantom{00}}$$

ለ. ነዚ ሰደቻ ምርባሕ ተጠቂምኩም ዋጋ ሳንዳች ድለዩ።



$$1 \times 2 = 2$$

$$6 \times 2 = 12$$

$$2 \times 2 = 4$$

$$7 \times 2 = 14$$

$$3 \times 2 = 6$$

$$8 \times 2 = 16$$

$$4 \times 2 = 8$$

$$9 \times 2 = 18$$

$$5 \times 2 = 10$$

$$10 \times 2 = 20$$

$$8 \times 2 = \boxed{\phantom{00}}$$

$$2 \times 10 = \boxed{\phantom{00}}$$



$$2 \times 8 = \boxed{\phantom{00}}$$

$$10 \times 2 = \boxed{\phantom{00}}$$



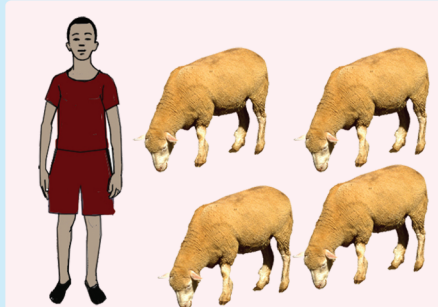
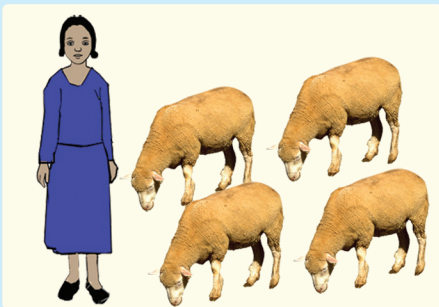
**መልመዳ 7**

በዝሒ መዝ ብምርባሕ ግለፁ።




$$\square \times \square = \square$$

ክልተ አሕዋት ሕድሕዶም አርባዕተ አባጊዕ አላወኑም።  
ጠቕላላ በዝሒ አባጊዕ ብምርባሕ ግለፁ።



$$\square \times \square = \square$$

ስለለስተ ማርቴሎ አለና። ብርባሕ 2 ንምግለፅ ባዶ ቦታ ምልኡ።



$$\square \times \square = \square$$

11

12

13

14

15

16

17

18

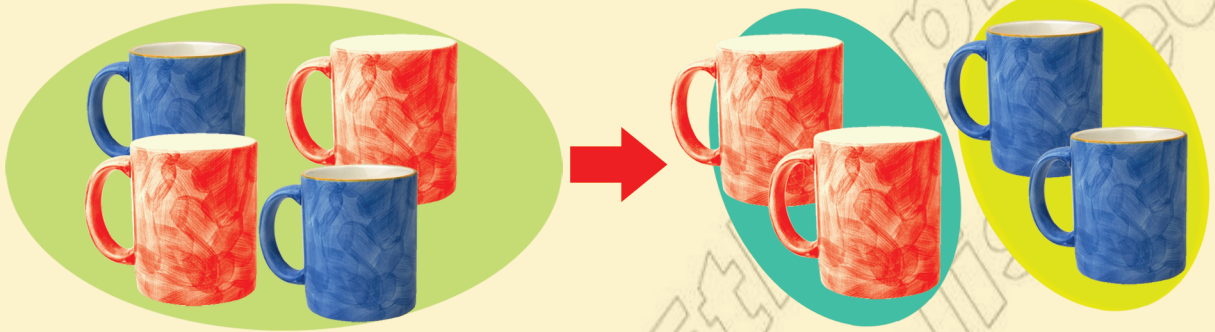
19

20


X ÷

## 7.2. ብዙይተረፍ ንጊ ምምቃል

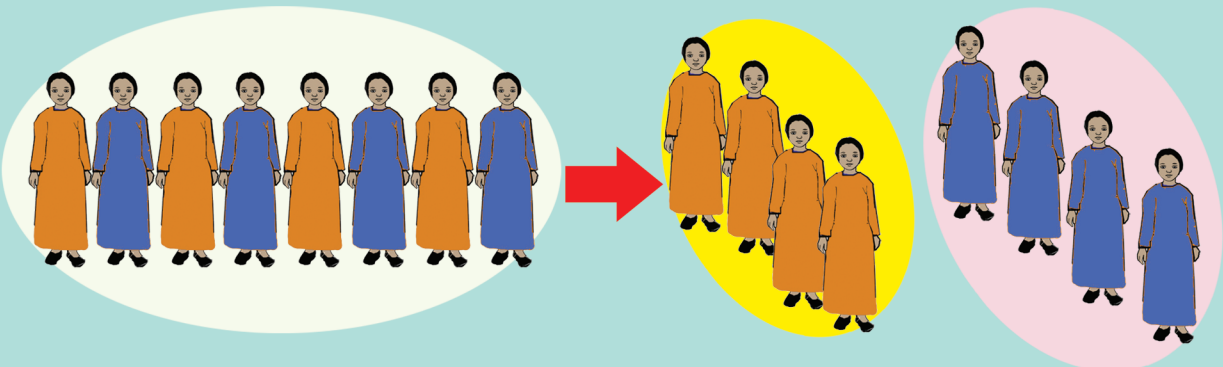
ንጥፈት 7 ዋጋ ሳንዱቅ ድለዩ።



$$4 \div 2 = \boxed{?}$$



$$6 \div 2 = \boxed{?}$$



$$8 \div 2 = \boxed{?}$$



ንጥራት 8 ዋጋ ሳንዳኞች ድለዩ።

1

14 ÷ 2 = ?  
ተመቃላይ   መቻላይ   ብፅሒት

2

? ÷ ? = ?

3

? ÷ ? = ?  
? X ? = ?

11

12

13

14

15

16

17

18

19

20

X ÷

መልመዳ 8

ሀ. ምቅለ፡፡

$10 \div 2 = \boxed{?}$

$14 \div 2 = \boxed{?}$

$18 \div 2 = \boxed{?}$

$12 \div 2 = \boxed{?}$

$20 \div 2 = \boxed{?}$

$8 \div 2 = \boxed{?}$

ለ. ባዶ ቦታ ምልክ፡፡

$12 \div 2 = 6$   
 $2 \times 6 = 12$



$14 \div 2 = \boxed{?}$   
 $2 \times 7 = \boxed{?}$



$16 \div 2 = \boxed{?}$   
 $\boxed{?} \times \boxed{?} = \boxed{?}$



$8 \div 2 = \boxed{?}$   
 $4 \times 2 = \boxed{?}$




$10 \div 2 = \boxed{?}$   
 $5 \times 2 = \boxed{?}$





መልመዳ 9 ተደላዩ ቁፅሪ ፅሐፉ።



አእጋሮም ቆዩርኩም ብርባሕ 2 ግለፁ።

