

Cutubka

Gaad

Fasalka 1^{aad}



Fasalka 2^{aad}



Halkii sawir  hal arday

URURINTA IYO HABAYNTA XOGAHA

9.1 Garaafi-Sawireed Fudud

Garaaf-sawireedka fa'aidadiisu waxay tahay isaga oo si fudud loogu muujin karo xogo kala gadisan.

Hawlgal 9.1


Ardayda fasalka 3^{aad} ayaan weydiiyey inay soo ururiyaan xog ku saabsan ciyaaraha isboortiga ee kala ah orod, kubbada cagta, waran tuuris in uu arday kastaa sheego midda u jecelyahay.




Sidaas darteed-shaxankan hoos ku xusan ayey ardaydu ku muujiyeen natiijada ay heleen.

Ciyaarta isboortiga	Xariiq ku tiris	Tirada ardayda
Waran tuuris	////	4
Orod	### ///	8
Kubada cagta	### ### //	12


























Ogsonow: xariiq ku tirintu waa habka xariiqyo yar yar la isticmaalo ee ugu degdeg badan marka xogaha la ururinayo.

- 1 Ardayda fasalku intooda u badani ciyaartee ayey jecelyihiin?
- 2 Ciyaarta ay ardayda ugu tirada yar ay jeceshahay waa ciyaartee?

Xogtan korka shaxda lagu muujiyey waxa loo habayn karaa in inta halkii arday-ba lagu tilmaamo sawirka  dabadeedna xogta lagu muujiyo sawir-giraaf.




- 3 Tirada ardayda orodka jecel si loogu muujiyo giraaf sawireed imisa  ayaa la sawirii?
- 4 Tirada ardayda kubada cagta jecel si loogu muujiyo giraaf sawireed imisa  ayaa la sawiri?
- 5 Sidoo kale in giraaf-sawireed lagu tilmaamo inta waran tuurka jecel imisa  ayaa loo baahan yahay in la sawiro?

Giraaf-sawireed tusaya ciyaaraha isbortiga ee orodka kubada cagta iyo waran tuurka; sida ay ardayda fasalka 3^{aad} u kala jecelyihiin.

Waran tuuris	   
Orod	       
Kubada cagta	           
Sawirkani	 midkii kastaba wuxuu matilayaa ama wakiil u yahay hal arday.

Raac talooyinkan hoose si aad u sawirtid giraaf-sawireed.

- b** *Xogta la ururiyay sawir u dooro*
- t** *Goaanso xogkasta inta sawir ee aad jmuujinaysid.*
- j** *Xogta sawir ku muuji.*
- x** *Cinwaan ku magacaw garaaf sawireedka; hoostiisana ku qor cadayn sheegaysa halkii sawir inta u wakiil uga yahay.*

- 6 Xogta lagu sharraxay shaxda dhinaca bidixda ku taala giraaf-sawireed ku muuji.
- 7 Marka aad sawiraysiin giraaf-sawireedka haddii labadii buugba aad ku matilaysid sawirkan  10 buug tirada  ee inaad sawirtiin ah iswarsada oo kawada xaajooda.
- 8 Laba buug haddii aad ku matilaysid hal sawirkan  ah hal buug sidee loogu matili karaa? Kawada xaajooda.

Maxamuud iyo saaxibkii labadii billood ee fasaxa tirada buugaagta sheekooyinka ay akhrieen		
Maxamuud	### ###	10
Cumar	### /	6
Khadar	### //	7
Carte	### ////	9

Laylis 1



- 1 Shaxda dhinaca midig ku muujisan eega, ka dibna fasalada heerarka kala gadisan tirada xubnaha ka tirsan ururka sayniska garaaf-sawireed muujinaya, sawira (sameeya).

Tirada xubnaha ka tirsan ururka sayniska

Fasalka 1 ^{aad}	//	2
Fasalka 2 ^{aad}	////	4
Fasalka 3 ^{aad}	### ///	8
Fasalka 4 ^{aad}	### /	6
Fasalka 5 ^{aad}	### ////	9

☞ *Ha iloobina inaad cinwaan siisiin garaaf-sawireed-kiina.*

☞ *Garaaf-sawireedka ad sawiraysiin in uu idin ka caawiyoo hoos ayaa garaafka bilawgiisa lagu sameeyay*

Fasalka 1 ^{aad}	
Fasalka 2 ^{aad}	
.	
.	
.	

Halkii sawir  hal arday

- 2 Ardayda aad saaxibada tihiin ee fasalkiina 5 ka doorta. Ka dibna weyddiia ay fasaxa yihiin inta saacadood ay shaqada qoyskooda ku caawiyaan. Xogtan shax muujinaysa marka aad samaysiin, dabadeed xogta ku diiwaaniya garaaf-sawireed muujinaya.

Hawlgal kooxeed

Ardayda fasalkiina laba kooxood u qaybiya koox B iyo koox T kadibna xogahan hoos ku xusan shax muujinaysa markaad u samaysiin dabadeed garaaf-sawireed ku muujiya.

Koox B khudaarta kala ah, muus, liinmacaan iyo cambalaf midka ay aad u jecelyihiin.

Koox T midabada kala ah casaan, doogo iyo buluuq midka ay aadka u jecelyihiin.

9.2 Sharraxidda (macnaynta ama tarjumida) garaaf-sawireedyada fudud

Garaaf-sawireed inta la eego ayaa si dhib yar sharraxaad looga bixin karaa, ama laga macnayn karaa xogta ku diiwaansan.

Hawlgal 9.2

Sahra ardayda fasalkeeda nooca ciyaaraha ay jecelyihiin garaaf-sawireed muujinaya ayay u diyaarisay sida dhinaca midigta ku xusan.

Nooca Ciyaarta ay ardayda Jaceshahay	
Kubada cagta	<input type="checkbox"/> <input type="checkbox"/> <input type="checkbox"/> <input type="checkbox"/> <input type="checkbox"/> <input type="checkbox"/>
Nashiido kucadayn	<input type="checkbox"/> <input type="checkbox"/> <input type="checkbox"/> <input type="checkbox"/> <input type="checkbox"/>
Isereryad	<input type="checkbox"/> <input type="checkbox"/> <input type="checkbox"/>
Dhumaalaysi	<input type="checkbox"/> <input type="checkbox"/>
Xadhig kubood	<input type="checkbox"/> <input type="checkbox"/> <input type="checkbox"/> <input type="checkbox"/>
Halkii <input type="checkbox"/> waliba hal arday ayuu matilayaa.	

- Nooc waliba oo ciyaaraha imisa arday ayaa ku diiwaanshan?
- Ciyaartee ayay arday badani jaceshahay?
- Ciyaarta xadhig kuboodka iyo nashiida qaadista midkee ayay arday badani jaceshahay?
- Fasalka sahra ciyaarta ay arday tirada ugu yar ay jecshahay waa tee?

Laylis 5

1 *Saynab oo macalimad ah ayaa dugsiga ay ka barto dhabarkiisa danbe bannaanka ku yaala tirada geedo ay ardaydu ku talaaleen saddex maalmood garaaf-sawireed muujinaya ayay sida hoos ku xusan u diyaarisay*

Tirada geedaha la talaalay, Jimce ilaa Axad	
Jimce	▲▲▲
Sabti	▲▲▲▲▲▲▲▲▲
Axad	▲▲▲▲▲▲▲

Halkii ▲ hal arday ayay matilaysaa

- Maalintee ayaa geedo badan la talaalay?
- Maalin kasta geedaha talaalka ee la talaalay tiradoodu waa imisa?
- maalinta geedaha ugu tirada yar la talaalay waa maalintee?

- x** maaliintii sabtida geedaha la talaalay tiradoodu imisa ayay dheer tahay (ka badan tahay) tirada geedaha maalintii jimcaha la talaalay?
- kh** Saddex maalmood imisa geed ayaa la talaalay?
- d** Hal geed oo talaal ah haddii uu qiimihiisu yahay laba birr iyo konton saantiim, maalintii jimcaha geedaha talaalka ee la talaalay qiimahoodu waa imisa?

2 *Garaaf-sawireedka hoos ku muujisan wuxu muujinayaa oo lagu diiwaaniyay magaalo dhaxdeed mudo shan bilood ah bisha sane ilaa bisha Tiqimti tirada maalmaha ee uu roob ku da'ay.*

Bisha sane ilaa bisha tiqimti tirada maalmaha ee uu roobku da'ay	
Sane	● ● ● ● ● ● ● ● ● ●
Hamle	● ● ● ● ● ● ● ● ● ● ● ● ● ● ● ●
Nehase	● ● ● ● ● ● ● ● ● ● ● ● ● ● ● ●
Meskerem	● ● ● ● ● ● ● ● ● ● ● ● ● ● ● ●
Tiqimti	● ● ● ● ● ● ● ● ● ●

Halkii ● 2 maalmood ayuu matilayaa

- b** Sawirkan ● midkastaa imisa maalmood ayuu matilayaa?
- t** Bil kasta tirada maalmaha u roobku da'ay waa imisa?
- j** Bisha uu roobku maalmaha ugu badan da'ay waa bishee?
- x** Bisha uu roobku maalmaha ugu tirada yar da'ay waa bishee?
- kh** Bisha sane iyo bisha Nahaase roobku midda uu maalmo badan da'ay waa bishee?
- d** Shanta bilood dhammaan maalmaha uu roobku da'ay waa imisa?

Hawlgal kooxeed

Garaaf-sawireed faaiiddisu koox koox idinka oo ah iswarsada. Kadibna waxaad ka wada hadasheen ardayda saaxiibadiin ah ee fasalkiina u cadeeya.